

Please check the examination details below before entering your candidate information

Candidate Name

Class

Section

BLOOM Computer Olympiad (BCO)

Question Paper 2024-25

Class
1

Total Questions **35 + 3** (Tie-Breaking Section)


Total Time Allotted :
60 minutes

Total Marks
35

Instructions

1. There are **35 Multiple Choice Questions** in this booklet having 4 options out of which **ONLY ONE** is correct.
2. 1 Mark will be allotted for each correct answer.
3. All questions are compulsory. There is **NO negative** marking for incorrect answers.
4. Total time allotted to complete the paper is 60 minutes.
5. Please fill in your details in the space provided on this page before attempting the paper.

OMR Sheet Instructions

1. Before starting the paper, fill in all the details in the OMR Sheet.
2. Additional 10 minutes will be provided to fill up the OMR sheet, before the start of the exam.
3. Use HB Pencil to darken the circle of the correct Option in OMR sheet. The correct way to darken the circle in OMR sheet is shown below.

4. Use black or blue ball point pen/HB pencil to fill the information in the OMR sheet. Partially filled OMR sheet will not be checked.
5. Return the OMR sheet to the invigilator after the exam.

CODE#158

Com1



Bloom Computer Olympiad Class 1

1. Arrange the following pictures in correct order to show the steps followed in switching ON a computer.



(a) D , C, B, A

(b) A, B, C, D

(c) D, B, A, C

(d) A, D, B, C

2. To open your favourite game on the computer, what do you need to click on to ?

(a) The keyboard

(b) The mouse

(c) The printer

(d) The speaker

3. Use key to write about yourself in three lines on notepad as shown below.

My name is Sohail.

I live in Mumbai.

I am 5 years old.

(a) Enter

(b) Backspace

(c) Ctrl

(d) Caps Lock

4. The option  is to crop

(a) The entire drawing canvas

(b) A specific part of your drawing

(c) The resolution of your drawing

(d) None of these

5. Where can we find the option to shut down the computer in window 10?

(a) On the screen's top right corner

(b) On the screen's bottom left corner inside the start menu

(c) On the screen's bottom right corner

(d) On the keyboard

6. How do we see the information provided at the bottom of the page?

(a) Scroll down with the down arrow key

(b) Open the page again

(c) Get close to the screen

(d) Minimize the page

7. What does the left button on the mouse typically do?

(a) Click and select things on the computer screen

(b) Refresh the screen

(c) Change the background of the screen

(d) Print the document

8. Choose the incorrect statement out of the given statements.

I. The monitor shows what we do on the computer.

II. The keyboard is used to draw pictures.

III. A scanner is used to play games on the computer.

IV. The CPU is also called the brain of the computer.


(a) Only I

(b) Only II

(c) II and III

(d) Only IV

9. To which location does a deleted file is stored when we DELETE a file?



10. Fill in the blank :

When we select any icon on the desktop, it turns in colour.

(a) red

(b) white

(c) blue

(d) black

11. State which among the following statements are correct.

Statement 1 To open a program, you need to double click on its icon.

Statement 2 After turning ON the computer, the screen stays black forever.

Statement 3 After clicking on 'Shut down', the computer turns OFF completely.



(a) Statement 1 and Statement 2

(b) Statement 1 and Statement 3


(c) Statements 1,2 and 3

(d) All the Statements are incorrect

12. Which of the following tools is used to fill colour in your drawing?



13. A computer tells us about the availability of seats in trains and aeroplanes. It also provides us with printed railway/aeroplane tickets with the help of



(a) Printer

(b) Scanner

(c) Projector

(d) All of these

14. Which of the following options best suits the given description?

"I display what you write, I display what you write".

(a) Mouse

(b) Monitor

(c) Printer

(d) CPU

15. Arrange the following devices in a largest to smallest order, regarding the amount of space they take.



(a) $1 > 2 > 3$

(b) $3 > 1 > 2$

(c) $2 > 1 > 3$

(d) $3 > 2 > 1$

16. Which of the following options is not a part of computer hardware?

(a) Keyboard

(b) Joystick

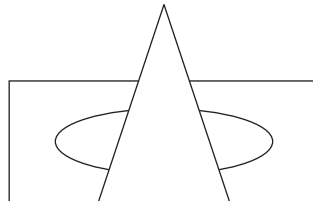
(c) MS Paint

(d) Speaker

17. Match the following :

Column 1	Column 2
1. We can carry it in a pocket easily.	A. Laptop
2. You can click pictures with it.	B. Smartphone
3. It can easily fit in your lap.	C. Camera
(a) 1-B, 2-C, 3-A	(b) 1-C, 2-B, 3-A
(c) 1-A, 2-C, 3-B	(d) 1-B, 2-A, 3-C

18. Which of the following tool is not used while drawing the following picture?



(a) Oval Tool

(b) Triangle Tool

(c) Rectangle Tool

(d) Line Tool

19. The..... option safely shut down the computer and then starts it again.

(a) Startup

(b) Shutdown

(c) Log off

(d) Restart

20. Select the odd one out.


(a) Laptop

(b) Desktop

(c) Chair

(d) Mouse

21. Which of the following device is used to play video games?



22. Rahul wants to talk to his friend Ajay on a computer, which of the following devices he will be using while talking to his friend.

(a) Microphone

(b) Monitor

(c) Keyboard

(d) Mouse

23. Which of the following technology helps us talk to someone far away?

- (a) Radio (b) Letter (c) Video call (d) Television

24. How do you save a drawing you made on the computer?

- (a) Click on 'file' and then 'save'. (b) Click on 'menu' and then 'save'.
(c) Click on 'home' and then 'save as'. (d) All of these

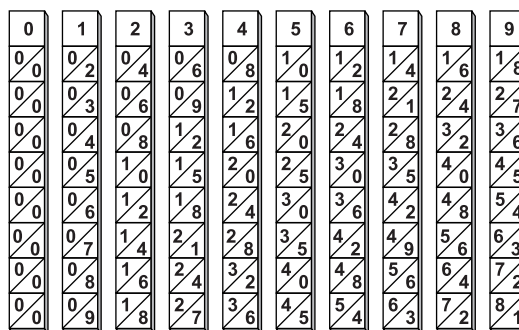
25. Select the odd one out.



26. Sunny and his friends bought a new DVD of a new movie, they wants to watch a movie. Is it possible for Sunny and his friends to watch the movie on the computer?

- (a) No, it is not possible to watch a movie on the computer.
(b) Yes, they can watch a movie on the computer.
(c) They can watch some other movies on the computer but cannot play the DVD.
(d) None of the above

27. Identify the given image.



- (a) Tabulating machine (b) Analytical engine
(c) Leibniz calculator (d) Napier's Bones

28. Which of the following statements is not true regarding the computers?

- (a) We can play Chess on a computer.
(b) We use joystick to play video games on a computer.
(c) We can listen music on the computer with the help of monitor.
(d) We can play a DVD on a computer.

29. In context of MS paint choose the correct statements.

Statement 1 By clicking on the colour box you can change the colour of your drawing.

Statement 2 You can draw straight lines in your drawing by using fill tool.

Statement 3 By clicking on 'save' option you can keep your drawings after finishing it.

- (a) Statement 1 (b) Statement 2
(c) Both statements 1 and 3 (d) None of these

-
- 30.** is the machine that can do tasks like humans and can talk.
- (a) Smart watch (b) Robot
(c) Voice assistant (d) All of these
-
- 31.** What do you understand by a “Smartwatch”?
- (a) A watch that can tell time and do more things like a cell phone.
(b) A type of computer hardware device
(c) An analog watch
(d) A watch that can cook food
-
- 32.** Your teacher asks you to solve mathematical calculations, which of the following software of computer you can use to practice math?
- (a) MS paint (b) Calculator
(c) PowerPoint (d) Notepad
-
- 33.** How can we use a computer to learn new things?
- (a) By playing educational video games (b) By watching learning videos
(c) Both (a) and (b) (d) By listening music
-
- 34.** What should you do if you see something on the computer that you don't understand?
- (a) Close the computer and walk away (b) Keep pressing buttons until it goes away
(c) Ask an adult for help (d) Refresh the computer
-
- 35.** Rashmi wants to talk to her father through video conferencing, which of the following options she must require to make a video call?
- (a) Internet (b) Monitor
(c) Paper (d) Keyboard
-

Tie-Breaking Section

Instructions

1. This section consists of 3 Questions.
 2. The score achieved in this section will not be included in the total marks.
 3. If overall marks of two or more students are same, winner will be decided based on the score in this section.
 4. Participation in this section is optional, and students may choose to attempt it or not.
-

- 1.** In context of computer choose the correct statement(s).
1. Computer sometimes feels tired.
 2. Computer does not need any instruction.
 3. Taking printout is an output action.
 4. The painting shown on monitor is the output.
 5. Monitor shows the work we do on a computer.
- (a) Only 3,4,5 are correct. (b) Only 1,2,3 are correct.
(c) All are correct. (d) None given statement are correct

2. Find the number of activities which can be done in a computer, hidden in the given grid.

V	A	X	U	S	D	E	R
D	P	L	A	Y	I	N	G
R	C	V	T	H	F	S	C
A	S	A	Y	M	R	V	B
W	O	F	P	I	C	E	R
I	T	B	I	F	I	K	L
N	O	A	N	N	K	A	N
G	N	L	G	A	T	I	O







(a) 1

(b) 3

(c) 5

(d) 7

3. Match the following icons with correct word.

Icon	Icon name
A. 	(i) Copy
B. 	(ii) Print
C. 	(iii) Paste
D. 	(iv) Save
E. 	(v) Cut
F. 	(vi) Color picker

(a) A-ii,B-vi,C-iv,D-v,E-i,F-iii

(c) A-ii,B-iii,C-vi,D-i,E-iv,F-v

(b) A-iii,B-i,C-v,D-iv,E-vi,F-ii

(d) A-i,B-iv,C-v,D-ii,E-iii,F-vi

