

Please check the examination details below before entering your candidate information

Candidate Name

Class

Section

**BLOOM Reasoning
Olympiad (BRO)**
Question Paper 2024-25

Class
1

Total Questions **35 + 3** (Tie-Breaking Section)

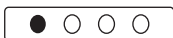
Total Time Allotted :
60 minutes

Total Marks
35

Instructions

1. There are **35 Multiple Choice Questions** in this booklet having 4 options out of which **ONLY ONE** is correct.
2. 1 Mark will be allotted for each correct answer.
3. All questions are compulsory. There is **NO negative** marking for incorrect answers.
4. Total time allotted to complete the paper is 60 minutes.
5. Please fill in your details in the space provided on this page before attempting the paper.

OMR Sheet Instructions

1. Before starting the paper, fill in all the details in the OMR Sheet.
2. Additional 10 minutes will be provided to fill up the OMR sheet, before the start of the exam.
3. Use HB Pencil to darken the circle of the correct Option in OMR sheet. The correct way to darken the circle in OMR sheet is shown below.

4. Use black or blue ball point pen/HB pencil to fill the information in the OMR sheet. Partially filled OMR sheet will not be checked.
5. Return the OMR sheet to the invigilator after the exam.

CODE #182

R1


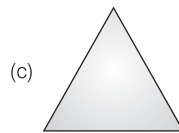
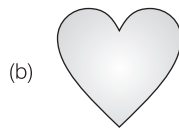
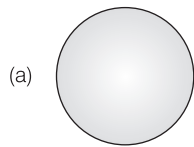



Bloom Reasoning Olympiad Class 1

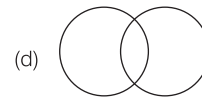
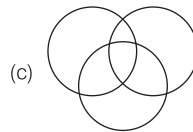
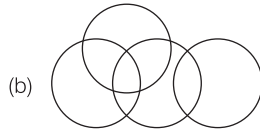
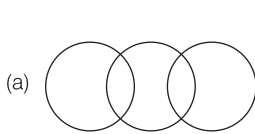
1. We use our nose to

- (a) hear (b) eat (c) smell (d) eat

2. Given below is an image, which among the following figure is related to the given image.



3. Which of the following figures contains exactly two circles?



4. Which of the following will replace the question mark?



Two



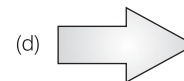
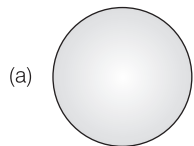
?

- (a) One (b) Two (c) Three (d) Four

5. If you want to see a doctor, you have to go to the

- (a) Church (b) Hospital (c) Temple (d) Hotel

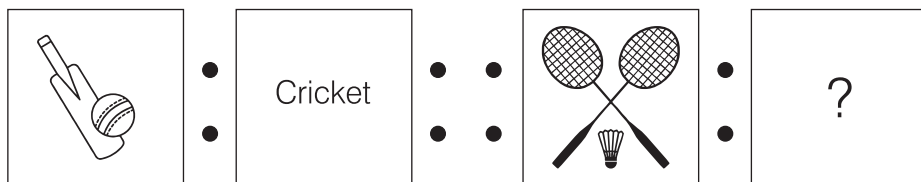
6. Which of the following figures has three sides?



7. Find the odd one out from the given options.


- (a) May (b) March (c) Sunday (d) June

8. Which of the following will replace the question mark?



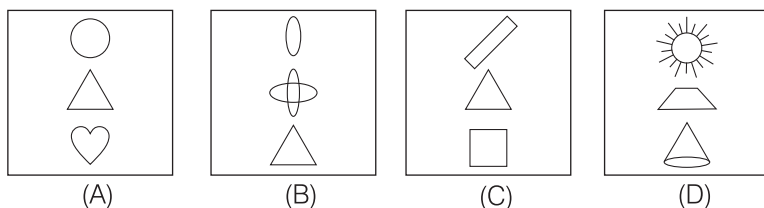
- (a) Badminton (b) Hockey (c) Football (d) Baseball

9. There are groups of 3 butterflies.



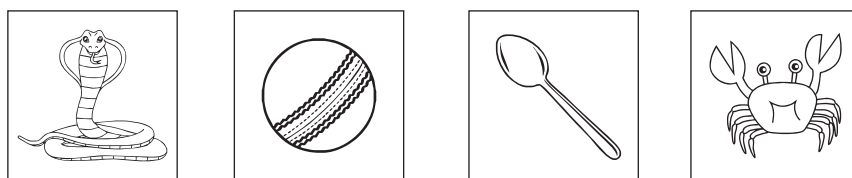
- (a) 4 (b) 2 (c) 5 (d) 3

10. The figure '□', belongs to group



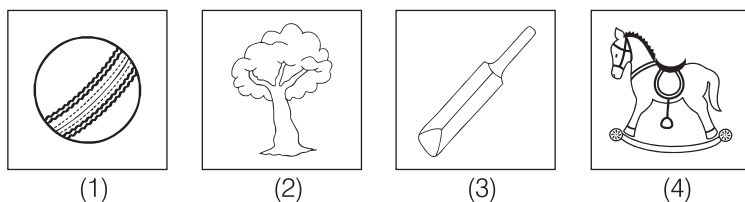
- (a) A (b) B (c) C (d) D

11. The  is at place.



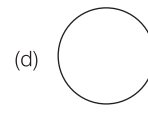
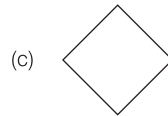
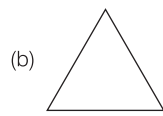
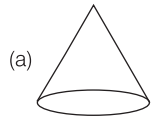

- (a) Second (b) Third (c) Fourth (d) First

12. Sort the toys by counting its total number.

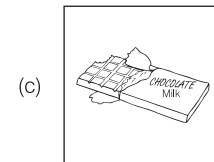
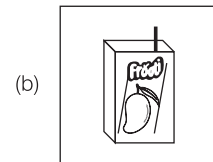

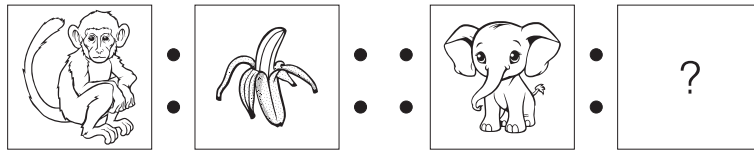


- (1) (2) (3) (4)
(a) 4 (b) 2 (c) 1 (d) 3

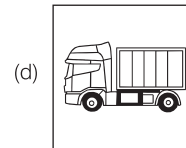
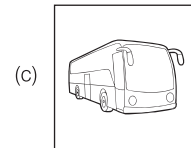
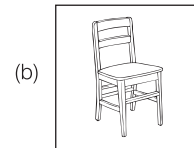
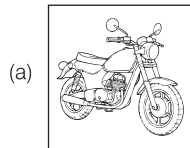
13. Identify the shape that comes next.



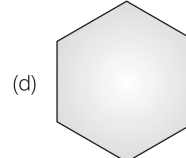
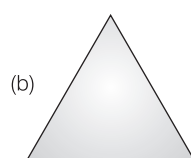
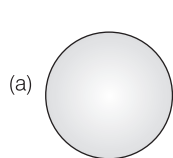
14. Which of the following will replace the question mark?



15. Find the odd one from the given options.



16. Which of the following look like a circle?



17. Which of the following does not belong to the group?

Mother, Sister, Aunt, Brother

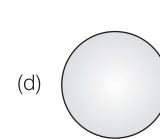
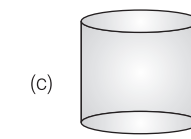
(a) Mother

(b) Sister

(c) Aunt

(d) Brother

18. Which of the following figure is similar to sun?



19. Which group does figure (X) belong to?

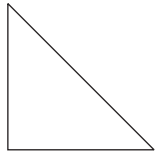
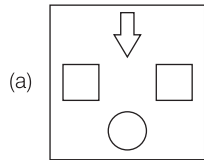
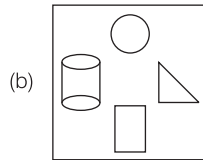


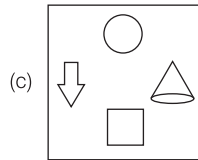
Figure (X)



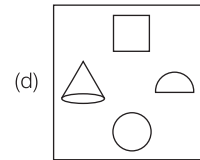
Group A



Group B

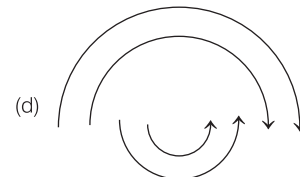
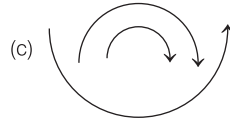
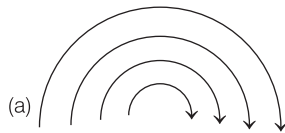
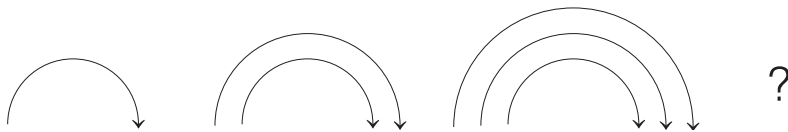


Group C




Group D


20. What comes next in the following pattern?




21. The third pen from the left is pen




(A)




(B)



(C)



(D)



(E)

Right

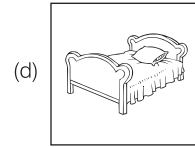
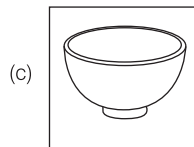
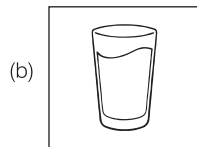
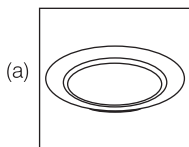



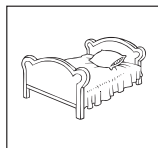
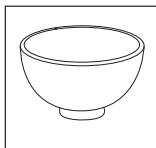
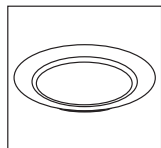
(a) A

(b) B

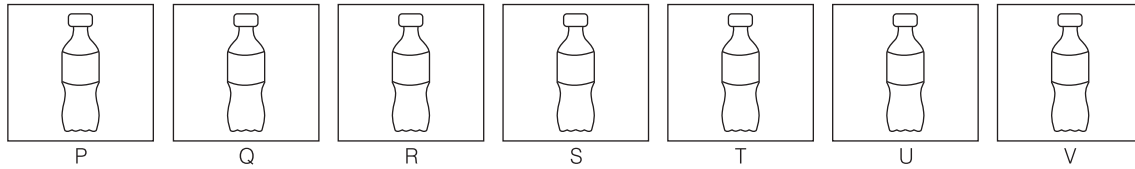
(c) C

(d) D

22. Sort the things that are not used in the kitchen.



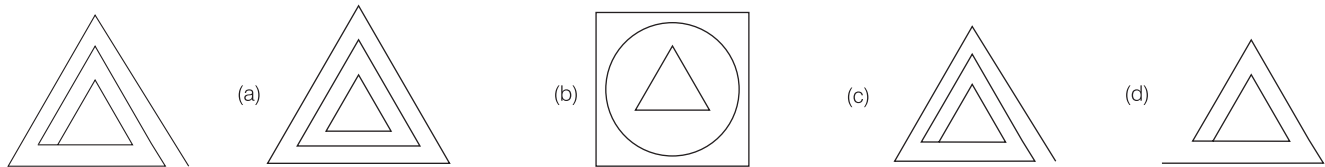
23. Here are pictures of 7 bottles in a row shown below.



Which bottle is exactly in the middle of the row?

- (a) S (b) R (c) U (d) Q

24. Which object is same as the given figure?



25. Which is the sixth letter from the left end in the given word?


Left I N D I A N Right

- (a) A (b) D (c) N (d) I

26. Which of the following does not belongs to the same group?

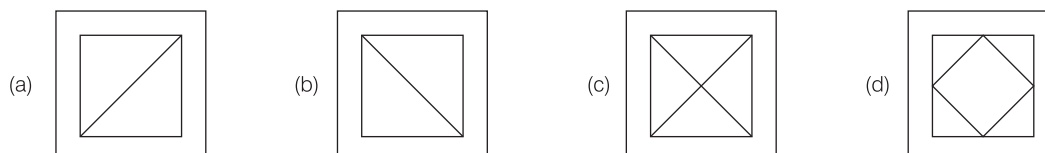
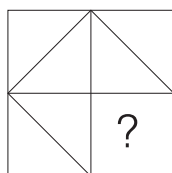
- (a) Juice (b) Milk (c) Pizza (d) Water

27. How many boys are standing to the right of Shyam?

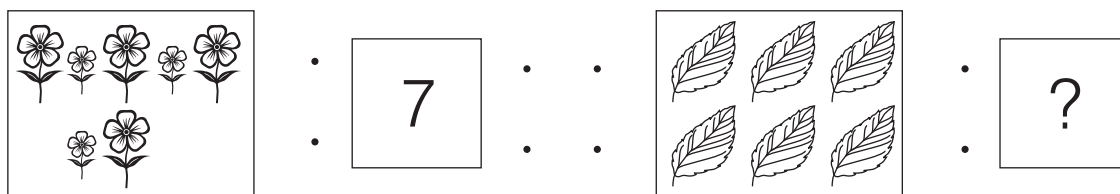


- (a) 4 (b) 3 (c) 2 (d) 1

28. Which figure will complete the given figure?



29. Which number will complete second pair in the same way as first pair?



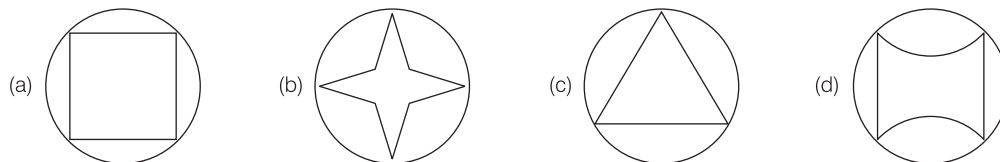
(a) 8

(b) 4

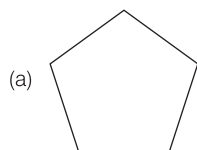
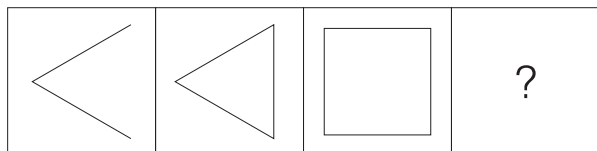
(c) 5

(d) 6


30. In which of the following figure shape 'Δ' is hidden?



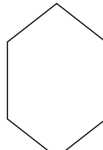
31. Which of the following will replace the question mark?



(a)



(b)

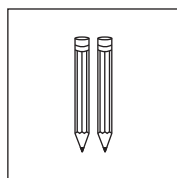


(c)

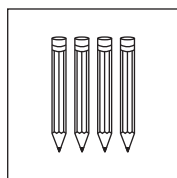


(d)

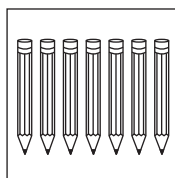
32. How many pencils Ram have?



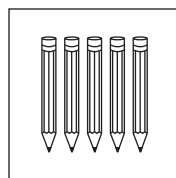
(Raman)



(Ram)



(Raju)



(Ritik)


(a) Four

(b) Seven

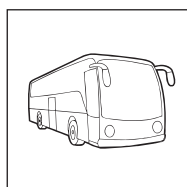
(c) Five

(d) Two


33. Find the odd one out.




(a)



(b)

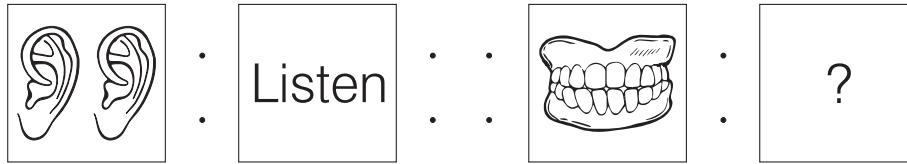


(c)



(d)

34. Which of the following will replace the question mark?




(a) Chew

(b) Smell


(c) See

(d) Touch


35. There are 4 dogs in




Group A



Group B



Group C



Group D

(a) Group A

(b) Group B

(c) Group C

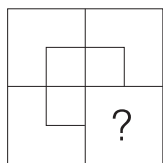
(d) Group D

Tie-Breaking Section

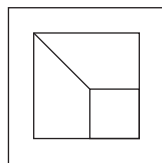
Instructions

1. This section consists of 3 Questions.
2. The score achieved in this section will not be included in the total marks.
3. If overall marks of two or more students are same, winner will be decided based on the score in this section.
4. Participation in this section is optional, and students may choose to attempt it or not.

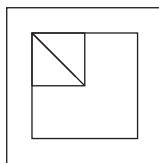
1. Which of the following will complete the given figure?



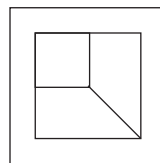
(a)



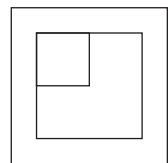
(b)



(c)



(d)



2. Which of the following is different among all?

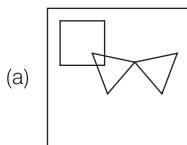
(a) Ears

(b) Fingers

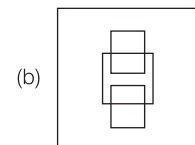
(c) Eyes

(d) Hands

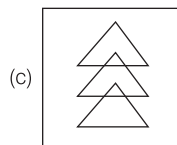
3. In which of the following figures a circle is hidden?



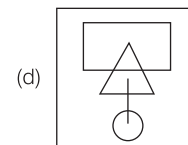
(a)



(b)



(c)



(d)