

Please check the examination details below before entering your candidate information

Candidate Name

Class

Section

BLOOM Social Studies
Olympiad (BSSO)
Question Paper 2024-25

Class
3

Total Questions: **35 + 3** (Tie-Breaking Section)


Total Time Allotted :
60 minutes

Total Marks
35

Instructions

1. There are **35 Multiple Choice Questions** in this booklet having 4 options out of which **ONLY ONE** is correct.
2. 1 Mark will be allotted for each correct answer.
3. All questions are compulsory. There is **NO negative** marking for incorrect answers.
4. Total time allotted to complete the paper is 60 minutes.
5. Please fill in your details in the space provided on this page before attempting the paper.

OMR Sheet Instructions

1. Before starting the paper, fill in all the details in the OMR Sheet.
2. Additional 10 minutes will be provided to fill up the OMR sheet, before the start of the exam.
3. Use HB Pencil to darken the circle of the correct option in OMR sheet. The correct way to darken the circle in OMR sheet is shown below.

4. Use black or blue ball point pen/HB pencil to fill the information in the OMR sheet. Partially filled OMR sheet will not be checked.
5. Return the OMR sheet to the invigilator after the exam.

CODE #144

SS3



Bloom Social Studies Olympiad Class 3

1. Which Indian academy promotes dance, drama and music?

(a) Sahitya Academy
(b) Lalit Kala Academy
(c) Sangeet Academy
(d) National School of Drama

2. Which of the following word is similar to the word 'season'?

(a) Ritu
(b) Varsha
(c) Grishma
(d) Monsoon

3. In which state is one of the seven wonders of the world located ?

(a) Sikkim
(b) Andhra Pradesh
(c) Madhya Pradesh
(d) Uttar Pradesh

4. On the day of March equinox, which season do we observe in India?

(a) Winter
(b) Spring
(c) Summer
(d) Rainy

5. What makes the planet Earth favourable for supporting life on it?

(a) Water
(b) Life supporting gas
(c) Ozone layer
(d) All of the above

6. The below image depicts Lohri, a festival celebrated in Punjab. In which season is it celebrated?



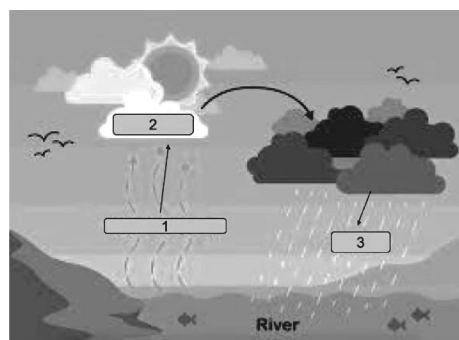
(a) Winter
(c) Summer

(b) Rainy
(d) Spring

7. On which night, we can see the complete full moon?

(a) Solar eclipse
(b) Lunar eclipse
(c) Amavasya
(d) Poornima

8. Complete the water cycle illustrated in the image below in the correct order.



(a) Precipitation, Condensation, Evaporation
(b) Evaporation, Condensation, Precipitation
(c) Condensation, Evaporation, Precipitation
(d) Evaporation, Precipitation, Condensation

9. The cheerful dance illustrated in the given below image is of which state?



(a) Kerala
(b) Gujarat
(c) Rajasthan
(d) Arunachal Pradesh

- 10.** What do we call the early humans?
 (a) Homonyms
 (b) Homo monkeys
 (c) Hominid/ Hominin
 (d) None of the above
- 11.** Seven islands constitute which of the following cities of India?
 (a) Mumbai
 (b) Chennai
 (c) Kolkata
 (d) Kovalam
- 12.** The tailed stars are called
 (a) Asteroids
 (b) Constellations
 (c) Comets
 (d) Planets
- 13.** Which of the following is not a metropolitan city?
 (a) Rajkot
 (b) Mumbai
 (c) Chennai
 (d) Bengaluru
- 14.** Hey! I wear white coat. I give you bitter medicines but make you healthy again. I can hear your heartbeat with my special instrument. Who am I?
 (a) Police (b) Scientist
 (c) Doctor (d) Farmer
- 15.** Which planet is considered as Earth's twin because of its similar size and shape like Earth?
 (a) Venus
 (b) Mercury
 (c) Jupiter
 (d) Mars
- 16.** Which among the following seasons has the longest night?
 (a) Spring (b) Summer
 (c) Winter (d) Autumn
- 17.** What are the sources of freshwater on this Earth?
 (a) River
 (b) Glaciers
 (c) Groundwater
 (d) All of the above
- 18.** In which metropolitan city, the President of India lives?
 (a) Mumbai
 (b) New Delhi
 (c) Bengaluru
 (d) None of the above
- 19.** Identify the musical instrument.



- (a) Flute (b) Sitar
 (c) Guitar (d) Veena

- 20.** How did the early man come to know about fire?
 (a) Fire was discovered as part of a ritual or religious practice.
 (b) By accidentally rubbing the stones.
 (c) They invented fire-starting tools and used them to make fire.
 (d) Their ancestors told them.
- 21.** Which metropolitan city has pani puri, Juhu chopati and Amitabh Bachchan as its most famous characters?
 (a) Kolkata
 (b) Chennai
 (c) Mumbai
 (d) None of the above

22. The Deccan Plateau lies in the

- (a) North-West part of India
- (b) Peninsular part of India
- (c) Plains of Ganga
- (d) Himalayan region

23. The cows are worshiped on the day of_____.

- (a) Bihu
- (b) Pongal
- (c) Onam
- (d) Mahavir Jayanti

24. Who is described in the image?



- (a) A labour
- (b) A driver
- (c) A farmer
- (d) A poor man

25. What did the early man eat before the discovery of fire?

- (a) Leaves
- (b) Flesh meat
- (c) Insects
- (d) All of the above

26. **Assertion** (A) The teacher helps us learn and grow in many ways.

Reason (R) The fire man protects people from fire burning .

Codes

- (a) Both (A) and (R) are true and (R) is the correct explanation of A.
- (b) Both (A) and (R) are true, but (R) is not the correct explanation of (A).

(c) (A) is true, but (R) is false.

(d) (A) is false, but (R) is true.

27. In early days when writing was not known people used to communicate through

- (a) Scripts
- (b) Pictographs
- (c) Telegraphs
- (d) Telex

28. Which of the following were the most important inventions which had led man to modern and civilized life?

- (a) Agriculture and Wheel
- (b) Wheel and Transport
- (c) Agriculture and Fire
- (d) Fire and Wheel

29. Who among the following is referred to as the 'Parrot of India'?

- (a) Amir Khusrau
- (b) Mirza Ghalib
- (c) Tansen
- (d) Sarojini Naidu

30. Identify the life supporting gas in our environment.

- (a) Argon
- (b) Oxygen
- (c) Carbon monoxide
- (d) Nitrogen

31. In the epic of Mahabharata, to which character did Lord Krishna give the knowledge of Bhagavad Gita ?

- (a) Arjuna
- (b) Yudhishtira
- (c) Duryodhana
- (d) Draupadi

32. Identify the coastal state.

- (a) Karnataka
- (b) Bihar
- (c) Himachal Pradesh
- (d) Nagaland

33. What type of occupation was practiced by the early humans?
- (a) Painter
 - (b) Farmer
 - (c) Writer
 - (d) Hunters and Gatherers


34. **Assertion** (A) Earth is also known as the 'blue planet'.




Reason (R) The 2/3rd surface of the Earth is covered with water.

Codes

- (a) Both (A) and (R) are true and (R) is the correct explanation of A.
- (b) Both (A) and (R) are true, but (R) is not the correct explanation of (A).
- (a) (A) is true, but (R) is false.
- (d) (A) is false, but (R) is true.

35. Match the following

List-I	List-II
A. 	1. New Delhi

B. 	2. Agra
C. 	3. Punjab
D. 	4. Rajasthan

Codes

- | | | | | |
|-----|---|---|---|---|
| | A | B | C | D |
| (a) | 3 | 4 | 2 | 1 |
| (b) | 4 | 3 | 2 | 1 |
| (c) | 3 | 4 | 1 | 2 |
| (d) | 2 | 4 | 3 | 1 |

Tie-Breaking Section

Instructions

1. This section consists of 3 questions.
2. The score achieved in this section will not be included in the total marks.
3. If the overall marks of two or more students are same, winner will be decided based on the score in this section.
4. Participation in this section is optional and students may choose to attempt it or not.

1. Consider the following statements.

- I. Goa is the smallest state in India.
- II. Aizawl is the capital of Mizoram.

Codes

- (a) Statement I is correct.
- (b) Statement II is correct.
- (c) Both statements are correct.
- (d) Both statements are incorrect.

2. **Assertion** (A) The Sun rises first in the state Arunachal Pradesh.

Reason (R) Arunachal Pradesh is the Western most state of India.

Codes

- (a) Both (A) and (R) are true and (R) is the correct explanation of (A)
- (b) Both (A) and (R) are true, but (R) is not the correct explanation of (A).

(c) (A) is true, but (R) is false.

(d) (A) is false, but (R) is true.

3. Match the names of planets given in Column I with their description given in Column II.

Column I	Column II
A. Jupiter	1. Planet with many rings
B. Mercury	2. Red planet
C. Saturn	3. Closest planet
D. Mars	4. Largest planet

Codes

	A	B	C	D		A	B	C	D
(a)	2	3	4	1	(b)	3	4	1	2
(c)	4	3	1	2	(d)	4	2	3	1

